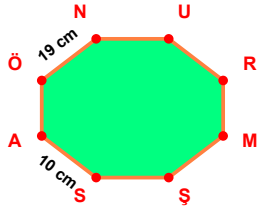
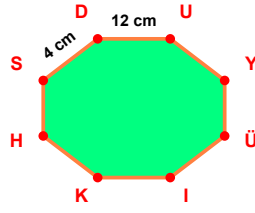


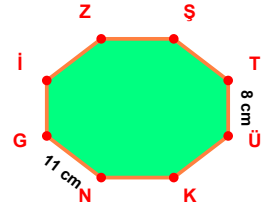
SORU: Aşağıdaki şekillerde verilen, kenar uzunlukları farklarını bulunuz.



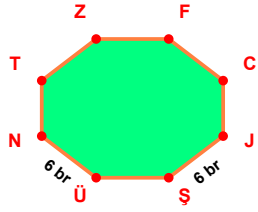
$$|ÖN| - |SA| = \dots\dots\dots$$



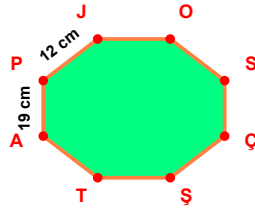
$$|DU| - |SD| = \dots\dots\dots$$



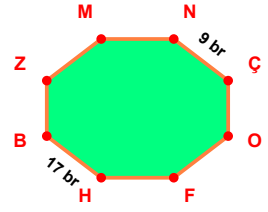
$$|NG| - |TÜ| = \dots\dots\dots$$



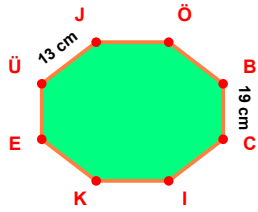
$$|JŞ| - |ÜN| = \dots\dots\dots$$



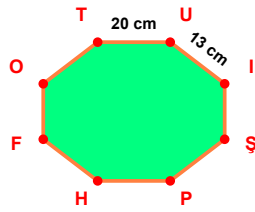
$$|AP| - |PJ| = \dots\dots\dots$$



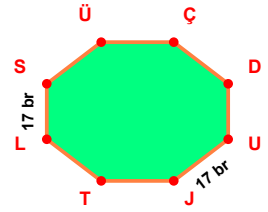
$$|HB| - |NÇ| = \dots\dots\dots$$



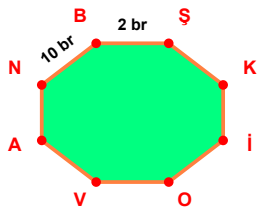
$$|BC| - |ÜJ| = \dots\dots\dots$$



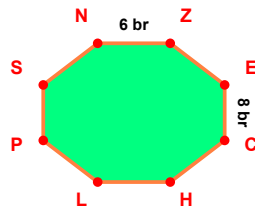
$$|TU| - |UI| = \dots\dots\dots$$



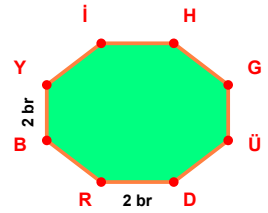
$$|LS| - |UJ| = \dots\dots\dots$$



$$|NB| - |BŞ| = \dots\dots\dots$$

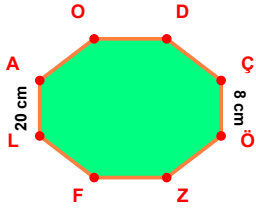


$$|EC| - |NZ| = \dots\dots\dots$$

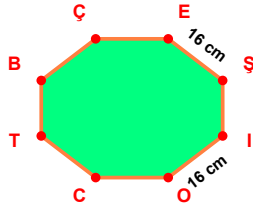


$$|DR| - |BY| = \dots\dots\dots$$

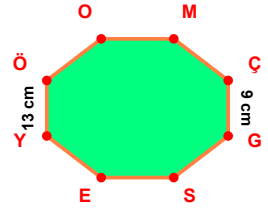
SORU: Aşağıdaki şekillerde verilen, kenar uzunlukları farklarını bulunuz.



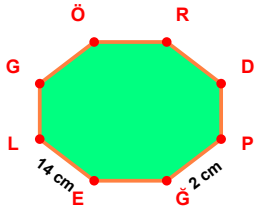
$$|LA| - |CH| = \dots\dots\dots$$



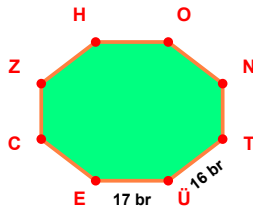
$$|DE| - |FG| = \dots\dots\dots$$



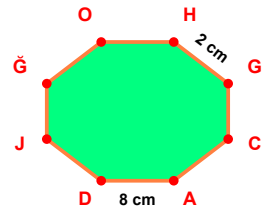
$$|DE| - |CH| = \dots\dots\dots$$



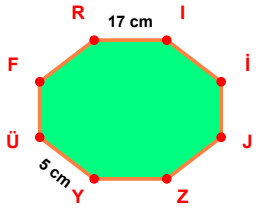
$$|DE| - |FG| = \dots\dots\dots$$



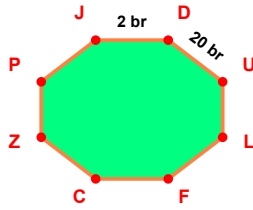
$$|DE| - |FG| = \dots\dots\dots$$



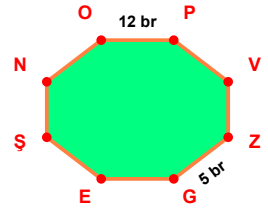
$$|DE| - |CH| = \dots\dots\dots$$



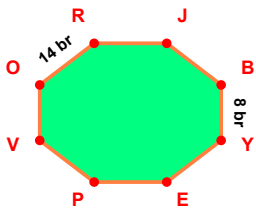
$$|DE| - |FG| = \dots\dots\dots$$



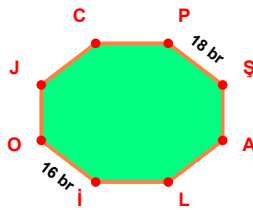
$$|DE| - |FG| = \dots\dots\dots$$



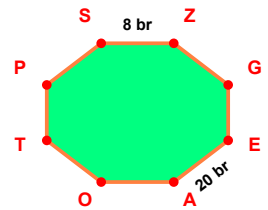
$$|DE| - |FG| = \dots\dots\dots$$



$$|DE| - |FG| = \dots\dots\dots$$



$$|DE| - |FG| = \dots\dots\dots$$



$$|DE| - |FG| = \dots\dots\dots$$

SÜREÇ ODAKLI DEĞERLENDİRME ÖLÇEĞİ

Doğru Sayısı: / 24

Öğretmen ilgili kutucuğu işaretler.

Geliştirilmeli (0-8)

İyi (9-14)

Çok İyi (15-20)

Mükemmel (21-24)

☐
☐
☐
☐

Hazırlayan:

Bu bölüme sınıfınızın ilgili kazanıma yönelik genel durumuna ilişkin gözlem ve izlenimlerinizi, öğrencilerinizin bu kazanımla ilgili öğrenme eksikliklerini ve bu eksikliklerin giderilmesi amacıyla yaptığınız/yapmayı planladığınız faaliyetleri not edebilirsiniz.

No	Adı - Soyadı	Toplam Puan	Değerlendirme
1			
2			
3			
4			
5			
6			
7			
8			
9			
10			
11			
12			
13			
14			
15			
16			
17			
18			
19			
20			
21			
22			
23			
24			
25			
26			
27			
28			
29			
30			
31			
32			
33			
34			
35			

Hazırlayan: